

Do all pages in this final packet!

DUE MAY 18 WED.

Name: _____ Period: _____

Date: _____

Utah County of the Week: San Juan

County Seat: _____

Other Major Cities: _____

Have you been to this county before? () Yes () No

How did this county get its name?

Use a map, the internet, _____ i to answer these questions.

The world's largest natural bridge. It's a national monument but not as colorful as it's name says.

A famous valley used to film many 'western' movies. _____ Valley

What man-made lake forms part of the western border? Lake _____

Three states that border San Juan County at the Four Corners Monument.

A main interstate/state road _____ - _____

The five counties that border San Juan County.

There is quite a variety of shapes and sizes of structures at Hovenweep National Monument on the Utah/Colorado border. Buildings include square and circular towers, D-shaped dwellings and many kivas. Archeologists estimate that most of these building were constructed between what years? Find the Hovenweep History & Culture page to help you find out.

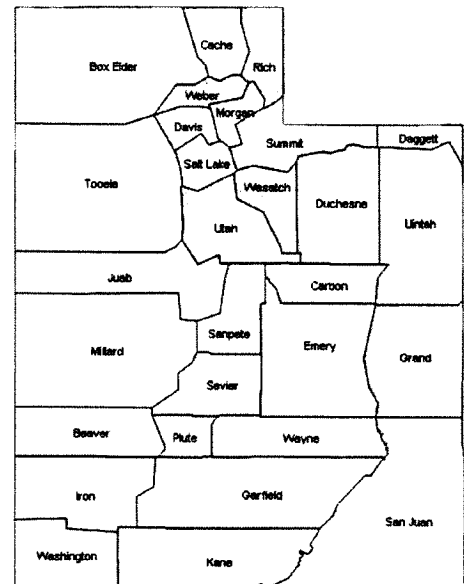
_____ A.D. to _____ A.D.

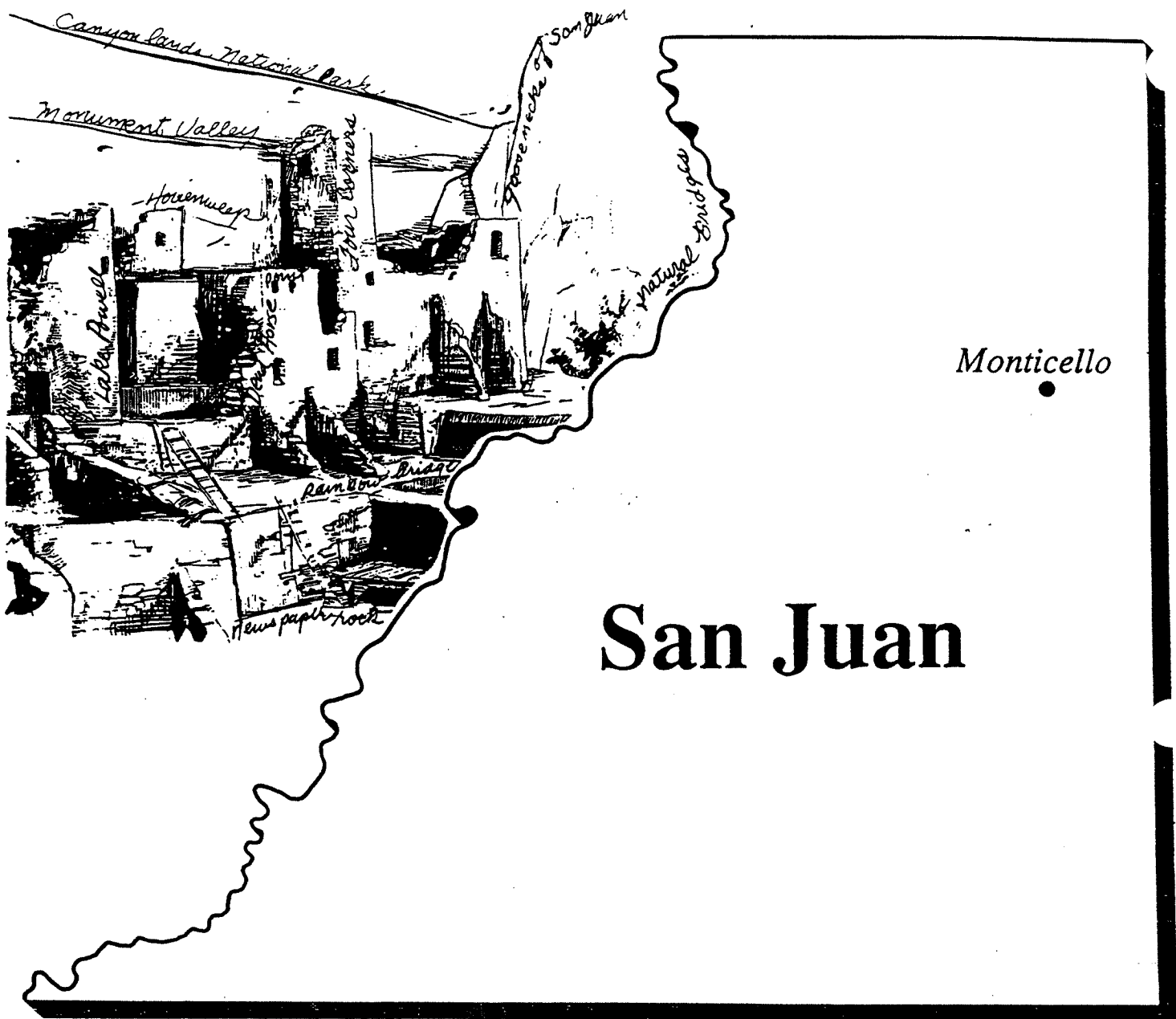
Using intercardinal directions/points, in what corner of Utah is San Juan County?

The river that flows through Goosenecks State Park.

This county is located primarily in which region...

- () The Great Basin
- () The Colorado Plateau
- () The Rocky Mountain





Search through the cliff dwellings above and find words that will help you fill in the blanks below. The words are names of places you can see in San Juan County. Some words and letters are already done for you.

D _ _ _ H _ _ _ P _ _ _

C _ Y _ L _ S _ N _ _ _ P _ _ _

M _ _ _ I _ _ _ Y _ _ _

H _ _ _ _ P _ N _ _ _ M _ N _ _ _ I

R _ N _ _ B _ _ G E _ _ _

N _ S _ P _ R _ R O _ _ _

_ _ _ _ _ B R _ D _ _ S _

G O _ _ _ _ _ O _ I _ E _ S A N J _ _ N

F _ _ _ _ C _ _ _ _ S _

I

D

Name: _____

Date: _____

Utah County of the Week: Salt Lake

County Seat: _____

Other Major Cities: _____

Have you been to this county before? () Yes () No

How did this county get its name?

Use a map, the internet, _____ to answer these questions.

Does Salt Lake County include any of the Great Salt Lake? () Yes () No

What famous basketball team will be at the Energy Solutions Arena on February 21, 2010?

Your school class is planning a trip to the Utah State Capitol building. Between what hours could your class visit?

Six counties that border Salt Lake County

_____ to _____

Your school class would like to visit the Clark Planetarium. What is the admission cost for each student on a school field trip?

\$ _____

What if we want to watch an IMAX film/movie?

\$ _____

Hogle Zoo covers how many acres of tree-lined pathways where visitors can view over 800 animals?

_____ acres

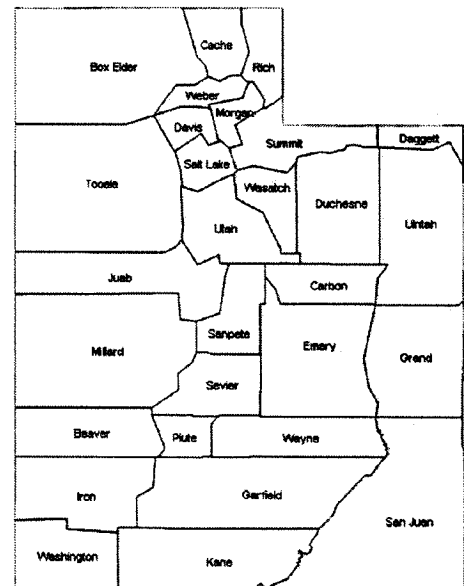
Salt Lake County has three major interstates. Name them.

I - _____ and I - _____ and I - _____

Watch some Salt Lake County videos online. What is one thing you would like to do or a place you would like to visit?

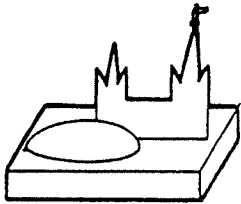

This county is located primarily in which region...

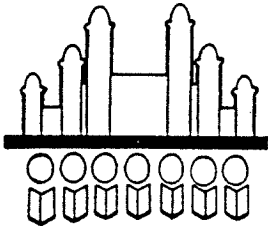
- () The Great Basin
- () The Colorado Plateau
- () The Rocky Mountain





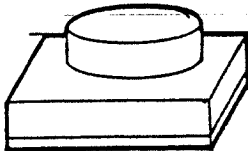
Below find some symbols of famous things to see and do in Salt Lake County. Beside each symbol fill the blanks with the correct word. You may want to refer to the brief summary of Salt Lake County.

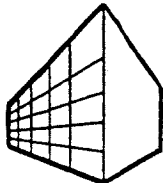














Name: _____

Date: _____

Utah County of the Week: Summit

County Seat: _____

Other Major Cities: _____

Have you been to this county before? () Yes () No

How did this county get its name?

Use a map, the Internet, _____ to answer these questions.

Name the main mineral mined from the mountains of the Park City Area? _____

What was the original name of Park City? _____

Watch some videos of Park City. Name one thing you would enjoy. _____

The Uinta Mountains dominate the east part of Summit County. These mountains are the source of the three main rivers of Utah as well as many tributaries of the Green River. Name the three rivers.

_____ River _____ River _____ River

Name two different sports you can try out at the Utah Olympic Park.

This canyon was the main path for the Oregon Trail, Mormon Trail, Overland Stage, transcontinental railroad, and the Pony Express route. Interstate 80 now passes through it. It is near the farming town of Henefer.

_____ Canyon

Name the six counties that surround Summit County. _____

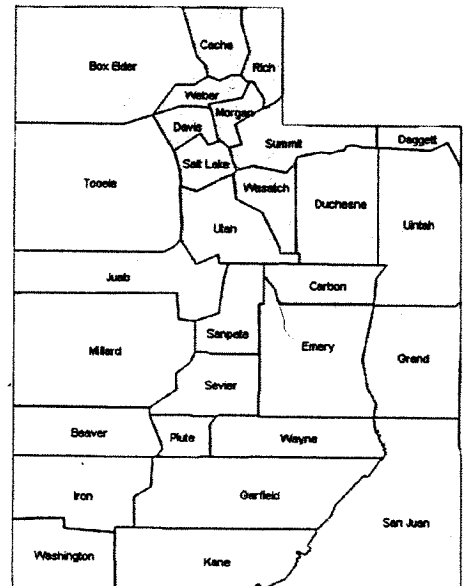
In your opinion, what town has the most unusual name?

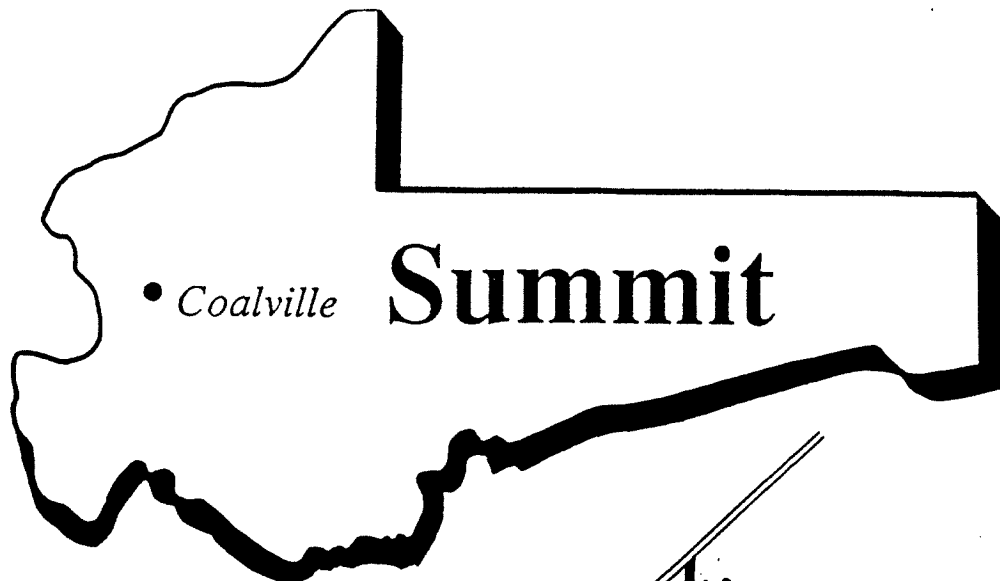
The main interstate I - _____

The state located northeast of this county.

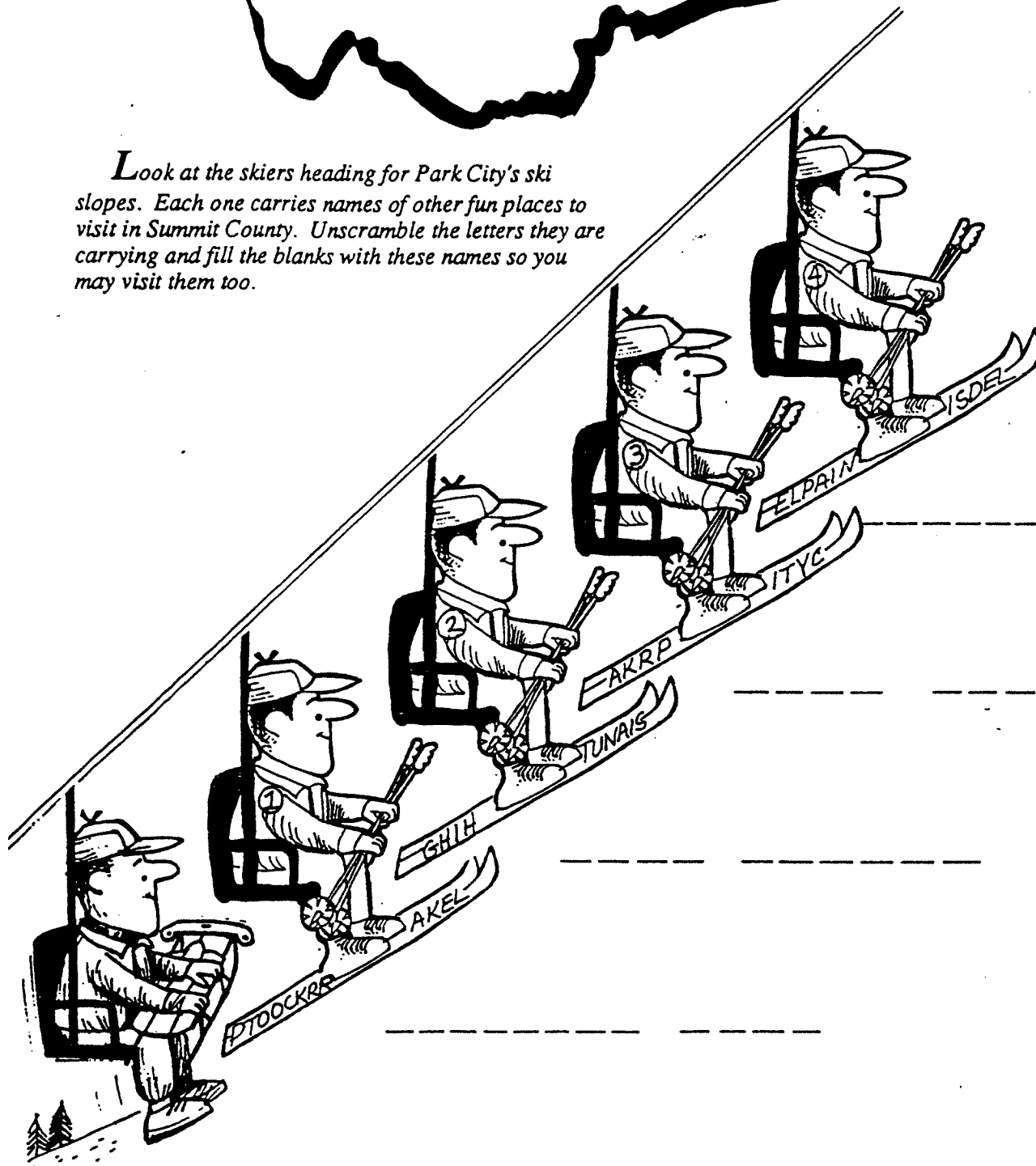
This county is located primarily in which region...

- () The Great Basin
- () The Colorado Plateau
- () The Rocky Mountain





Look at the skiers heading for Park City's ski slopes. Each one carries names of other fun places to visit in Summit County. Unscramble the letters they are carrying and fill the blanks with these names so you may visit them too.



Name: _____

Date: _____

Utah County of the Week: Washington

County Seat: _____

Other Major Cities: _____

Have you been to this county before? () Yes () No

How did this county get its name?

Use a map, the internet, _____ to answer these questions.

This county's nickname.

The county located east of this county.

"Utah's _____"

In 1854 this man was sent by Brigham Young to work with the Native Americans in the area and help establish a peaceful relationship between the Mormons and the Indians. What was his name.

A national park _____

This town's name could either be a type of bean, a model of Ford car, or a color of a horse.

Two states that borders this county.

_____ & _____

A silver mining town founded in the 1860's. The only place in North America where miners found silver within sandstone.

The main highway/interstate _____ - _____

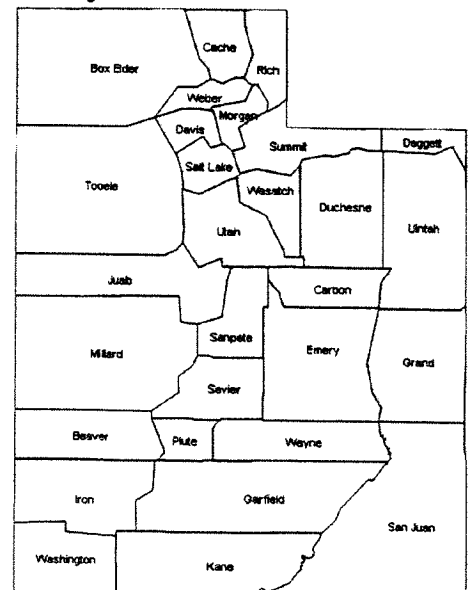
A Native American tribe that lived in this county. The Dominguez-Escalante expedition in 1776 recorded the first description of the Indians in this area. They now have tribal lands in Washington County.


A main highway/interstate _____ - _____

The county located north of this county.

This county is located primarily in which region...

- () The Great Basin
- () The Colorado Plateau
- () The Rocky Mountain





Washington


• *St. George*

Work the Washington County Crossword Puzzle

After reading the brief summary of Washington County, see how many of the crosswords you can fill in without referring back to the summary.

Across

1. County named in honor of the father of our country
5. National Park known for its beautiful solid rock walls that rise to over a half mile high
7. Reservoir in Washington County--recently flooded
8. St. George was started as a place where _____ could be grown by pioneers.
9. Motels are plentiful in St. George because of the _____.
10. Because of the good warm climate, Washington County is a good retirement place and many _____ are being built.



Down

2. The county seat for Washington County
3. A smaller version of Zion National Park
4. A nickname for Washington County area because cotton was grown there like in the southern states....Also a college
6. When people come to the end of their working career they go into _____.