

# Jimmy's Boutique

## Directions:

- Choose 6 total items from Jimmy's Boutique.
  - 3 items must have a discount
  - 3 items must have sales tax
- Find the total price OR sale price for each item.
- Create a receipt for the items you purchased.
- Include the Total Price at the bottom of the receipt.

Example:

<u>Jimmy's Boutique</u>		
ITEM	ORIGINAL \$	FINAL \$
Jacket	\$105.95	\$115.49
Blue Tie	\$7.09	87.49
Belt	\$16.50	
Red Heel	\$261.11	135.52
Shorts	\$24.42	20.45
Vest	\$29.90	
TOTAL PRICE:		\$ _____

# Jimmy's Boutique

## Directions:

- Choose 6 total items from Jimmy's Boutique.
  - 3 items must have a discount
  - 3 items must have sales tax
- Find the total price OR sale price for each item.
- Create a receipt for the items you purchased.
- Include the Total Price at the bottom of the receipt.

Example:

<u>Jimmy's Boutique</u>		
ITEM	ORIGINAL \$	FINAL \$
Jacket	\$105.95	\$115.49
Blue Tie	\$7.09	87.49
Belt	\$16.50	
Red Heel	\$261.11	135.52
Shorts	\$24.42	20.45
Vest	\$29.90	
TOTAL PRICE:		\$ _____

# Jimmy's Boutique



\$14.50

Discount of 4½%




\$105.95

Sales Tax of 9%



\$47.05

Discount of 19%



\$24.42

Discount of 16¼%



\$11.31

Sales Tax of 2.9%



\$37.65

Sales Tax of 2.8%



\$7.09

Sales Tax of 24%




\$49.99

Sales Tax of 7.7%



\$29.90

Discount of 70.2%



\$16.50

Sales Tax of 18½%



\$78.82

Discount of ¼%



\$274.36

Discount of 35.5%



\$12.77

Sales Tax of 4.6%

\$34.98

Discount of 6%



\$200

Discount of 16¼%



\$80.34

Sales Tax of 10.1%



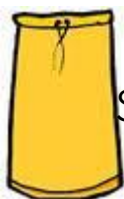
\$157

Discount of 42.3%



\$33.66

Discount of 22¼%



Sales Tax of 7¼%

\$19



\$13.97

Sales Tax of 1.3%



\$261.11

Discount of 48.1%



Name:

Date:

Period:

Directions: Using the Jimmy's Boutique flyer, choose **six** items to purchase. Write the item's name, the original price, and the final price after the discount or sales tax. To complete your receipt, add up the final price column to find out your total price.

## Jimmy's Boutique

ITEM	ORIGINAL \$	FINAL \$
------	-------------	----------

1.

2.

3.

4.

5.

6.

TOTAL PRICE: \$

**Challenge Question:** Choose 3 items on discount. Solve for the discounted price. Write each item's name, the original price, and the discount price. Then find the total price of the transaction with 8% sales tax. Find the total price for your purchase.

# Thanks for downloading

Sales Tax & Discount Activity – Jimmy's Boutique.

© S. DELUSSEY © *Mrs. D's Corner*

**border credit: teachinghasmalltown**

DON'T FORGET TO VISIT  
*Mrs. D's Corner*  
ON TEACHER'S PAY TEACHERS.  
FOLLOW US TO STAY UP-TO-DATE  
ON NEW ITEMS, RELEASED WEEKLY!

